

Name: _____

Date: _____

Volume Measurements

cups = 8 fluid ounces

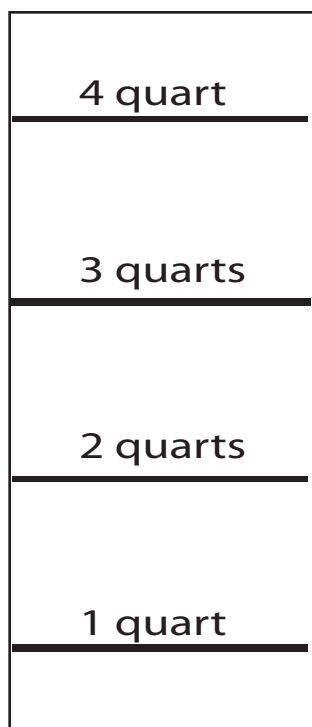
pints = 2 cups

quarts = 2 pints

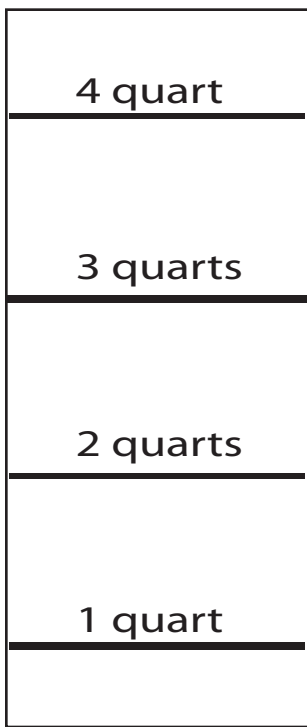
gallons = 4 quarts

1. How many quarts are in 2 gallons? _____
2. If you have 6 cups, how many pints do you have? _____
3. How many pints are in 3 quarts? _____
4. If you drink 3 cups of juice, how many fluid ounces did you drink? _____

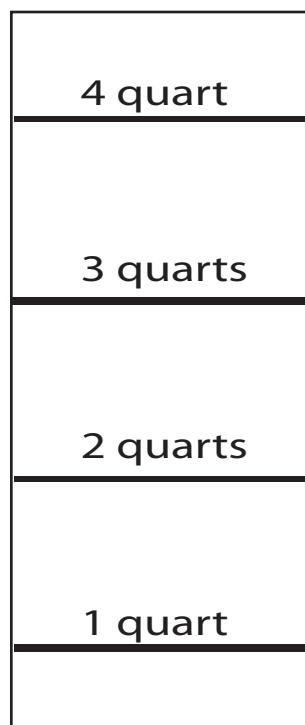
Color in the amount needed.



color in half a gallon



color in 2 pints



color in 1 gallon

